

"Money is a nuisance," he used to say. "We'd all be much better off if it had never been Invented. What does money matter, so long as we are happy?"

A. Answer the following questions.

- i. Who is Doctor Dolittle? Who lives in his house?
- ii. How did the crocodile end up being a guest at his house?
- iii. Why did Sarah Dolittle leave?
- iv. What does Doctor Dolittle say about money?

B. Fill in the blanks.

- i. The circus came to _____ .
- ii. The crocodile paid the doctor a visit because _____
- iii. The doctor could not send the crocodile back to _____ because _____ .

C. Make sentences with the following words:

- i. wild
- ii. Cured
- iii. ruined

Section-B

3. Give meanings for the following words: (6)

Echoed, Crumb, Luxurious, Mild, Strikes, Watchful, Meek

4. Answer the following questions: (2×5=10)

- i. What criteria does the casting director use to choose the contestants?
- ii. Describe the dwellings in Coober Pedy.
- iii. When is hope the sweetest, according to the poem?
- iv. How does Tippi's mother explain this unusual bond between Tippi and the wild animals?
- v. What does the nurse feel on hearing children's voices and laughter?
- vi. One should practise what one preaches. Do you think the elder brother followed this tenet?

**Bhagwan Mahaveer Public Senior Secondary School
Class 8th (2024-25)**



Subject : English (Term-I)

M.M 8

Section-A

1. Read the following passage and answer the questions: (8)

The greater Indus region is considered to be home to the four major ancient urban civilizations of Egypt, Mesopotamia, South Asia and China. This was discovered only in the 1920s.

Archaeologists discovered two cities that were located four hundred miles apart along the banks of the River Indus, in the Sindh Region of undivided India. The major part of the site is now in Pakistan. The cities are thought to be four thousand years old. They were built with an expertise that indicates the existence of a very advanced civilization, comparable to ancient Mesopotamian and Egyptian civilizations. Archaeologists called these cities Mohenjodaro and Harappa. Mohenjodaro means 'hill of the dead' and Harappa is named after a nearby village.

The people of Mohenjodaro and Harappa lived in sturdy brick houses that had as many as three floors. The houses had well-constructed bathrooms with a connection to the sewage system of the town. Their elaborate drainage system was centuries ahead of their time.

Archaeologists have found the remains of fine jewellery, including stones, from faraway places. This shows that the people of the Indus Valley civilization valued art and had trade relations with other civilizations.

Nobody yet knows what caused the extinction of this advanced civilization. It appears to have been abandoned in about 1700 B.C.E. However, there have been innumerable speculations about the cause of the extinction of the Indus valley civilization. Some archaeologists argue that a great flood may possibly have weakened the civilization. Another group argues that the

moving tectonic plates that created the Himalayas may have caused a devastating earthquake resulting in the extinction of the civilization. Yet others propose that perhaps the Indus Valley people were defeated by those of another culture.

a. Answer the following questions.

- i. What are the names of the four great civilizations of the ancient world?
- ii. Did the people of the Indus valley have an active connection with other cultures? If yes, what tells you so?
- iii. How old is the Indus Valley civilization?
- iv. What is the meaning of 'Mohenjodaro'?
- v. Do you think the claim of the Indus Valley civilization being very advanced is correct? Why?

b. Fill in the blanks by selecting the correct alternative.

- i. The Indus Valley civilization is thought to have been abandoned in about _____.
- ii. The site of the civilization is now in _____.
- iii. The citizens lived in _____.
- iv. Archaeologists found _____.

c. Find out words from the above passage that mean the following:

- i. very old
- ii. skill

2. Read the following passage and answer the questions(8)

And another time, when the circus came to Puddleby, the crocodile who had a bad toothache escaped at night and came into the Doctor's garden. The Doctor talked to him in crocodile- language and took him into the house and made his tooth better. But when the crocodile saw what a nice house it was-with all the different places for the different kinds of animals-he too wanted to live with the Doctor. He asked couldn't he sleep in the fish-pond at the bottom of the garden, if he promised not to eat the fish. When the

circus-men came to take him back, he got so wild and savage that he frightened them away. But to everyone in the house he was always as gentle as a kitten. But now the old ladies grew afraid to send their lap-dogs to Doctor Dolittle because of the crocodile; and the farmers wouldn't believe that he would not eat the lambs and sick calves they brought to be cured. So the Doctor went to the crocodile and told him he must go back to his circus. But he wept such big tears, and begged so hard to be allowed to stay, that the Doctor hadn't the heart to turn him out.

So then the Doctor's sister came to him and said, "John, you must send that creature away. Now the farmers and the old ladies are afraid to send their animals to you-just as we were beginning to be well off again. Now we shall be ruined entirely. This is the last straw. I will no longer be housekeeper for you if you don't send away that alligator."

"It isn't an alligator," said the Doctor-"it's a crocodile."

"I don't care what you call it," said his sister. "It's a nasty thing to find under the bed. I won't have it in the house."

"But he has promised me," the Doctor answered, "that he will not bite any one. He doesn't like the circus; and I haven't the money to send him back to Africa where he comes from. He minds his own business and on the whole is very well behaved. Don't be so fussy."

So Sarah Dolittle packed up her things and went off; and the Doctor was left all alone with his animal family.

And very soon he was poorer than he had ever been before. With all these mouths to fill, and the house to look after, and no one to do the mending, and no money coming in to pay the butcher's bill, things began to look very difficult. But the Doctor didn't worry at all.

c. Saute the mixture _____ (to/ during/ for) ten minutes.

IV. Fill in the blank by using 'a', 'an' and 'the'. Put a cross X where no article is required:

a. Sometimes I have _____ dinner at 'Torri'.

b. I loved reading as _____ child.

V. Complete the following sentences using the given options:

a. Kindly give me _____ (a few/ few/ the few) tips to improve my speaking skills.

b. _____ (whose/ what/ which) club, you are interested in?

(Each question will carry 1 mark)

I. Rewrite the following sentence in Simple Present Tense:
They are reading English books.

II. Change the following sentence into interrogative:
We wrote articles.

III. Using the given words, make meaningful sentence in *Future Continuous Tense*:
We/ come/ from the concert/ late at night.

IV. Put a tick (✓) against the correct sentence and a cross (×) against the incorrect sentence:
a. He have not invited me.
b. Have they won the contest?

V. Encircle the main clause and underline the subordinate clause, and state whether they are *Noun Clauses*, *Adjective Clause* or *Adverb Clause*:

- a. Everyone knows that she has topped the class.
- b. I know a person who is expert in sketching.
- c. She must take some rest if she feels tired.

VI. Choose the correct alternative which best expresses the meaning of the idiom in 'bold' letters:

- a. Swami told his Granny a **cock and bull story** about his teacher's illness.
 - i. a sad story
 - ii. a true story

5. Answer the following question: (3)

What might the children's refusal to return home represent? Discuss.

Or

According to the passage, why did they choose to make *Baking Big!* a family-friendly programme without scripted conflicts?

6. Do as directed: (12)

(Each question will carry ½ mark)

1. Choose the correct answer:

- A. The tense moments on the show cover...
 - a. bakers interacting with each other.
 - b. bakers exhibiting their baked stuff.
 - c. bakers putting their cakes into the oven or taking them out.
 - d. bakers mixing the dough and other ingredients.
- B. The writer found it amazing that Faye Naylor's home...
 - a. is not unique.
 - b. took 10 years to build.
 - c. began as a hole in the wall.
 - d. was built by a woman.
- C. According to the last paragraph, Tippi...
 - a. chose to make her life in France.
 - b. has not yet returned to Africa.
 - c. is continuing her studies in France.
 - d. is requesting her parents to go to France.

II. Correct the sentences:

- a. The younger brother would be amused listening to the harsh words of his brother.
- b. Tippi's family lived inside houses made on stilts.

III. Fill in the blanks with adjectives:

_____ breeze

IV. **Word building:** Complete the chart with words missing:

Verb	Noun	Adjective
Simplify	Simplicity	_____

V. **Expressions:** Complete the sentences. Use the words below:
way, scenes, say, word

- Filming the show was a success because people worked so hard *behind the* _____
- The director always *has the final* _____ about everything to do with the acting.

VI. **Easily Confused Words:** Choose the correct answer:

- Only hours after it is born, the baby is running across the hot ***dessert/ desert*** sands.

VII. Fill in the blanks:

curious, dwellings, claustrophobic

- The writer was _____ to visit the town of Coober Pedy.
- A congested locality can make you feel _____ .

(Each question will carry 1 mark)

I. **Read the statement and answer the questions:**

Neither the scorching summer heat nor the freezing winter cold is felt underground.

- Which place is the writer talking about?
- What temperature is regarded as constant underground?

II. **Complete the second sentence so that it has a similar meaning to the first, using the word given. Use between two and five words, including the word given:**

David lives quite close to the arts Centre. **FAR**

David _____ from the arts centre.

III. **Give one example of alliteration of your own:**

- _____
- _____

IV. **Mark the sentences that have *metaphors*:**

- She received shocking news yesterday _____
- My mother has a heart of gold. _____

V. **Complete the sentence. Put the verbs in brackets into the correct tense**

We _____ (*meet*) our cousins at the restaurant this evening.

VI. **Complete the sentences with the given determiners:**
either... or, both... and

She was _____ annoyed _____ irritated after an argument with her teacher.

Section-C

7. **Do as directed:** (16)
(Each question will carry ½ mark)

- I. Use the appropriate forms of the given verbs and fill in the blanks in these sentences:

- Here _____ (be) a 2000/- rupee note.
- Either your friends or Samir _____ (get) the ticket to the show.
- There _____ (come) the prize winners.
- My uncle along with his wife _____ (come) home tonight for dinner.
- Every question _____ (need) to be answered.
- Bimal and Suman _____ (go) to school together.

- II. Fill in the blanks by choosing the correct preposition from those given in the brackets:

- He couldn't run fast _____ (*in place of/ because of/ instead of*) his injured foot.
- There is a beautiful house _____ (*among/ at/ beside*) the restaurant.

- III. Fill in the blanks with appropriate 'Prepositions':

- We reached _____ (*in/ at/ within*) time _____ (*on/ at/ in*) the concert.
- You are not allowed to park your car _____ (*in/ over/ by*) here.

- iii. a false and imaginary story
- iv. an interesting story
- b. This car **cost** me **an arm and a leg** and you say it is not good at all.
 - i. is expensive ii. is value for money
 - iii. is quite cheap iv. is quite affordable
- c. I am still not used to the glamorous life of Bollywood. I continue to feel **like a fish out of water** here.
 - i. sick and tired ii. curious and excited
 - iii. awkward and uncomfortable
 - iv. surrounded by enemies

8. As a Senior NCC Cadet of D. A. V. Public School, Kurukshetra, you have been asked to draft a notice about a 10 day NCC training camp to be held in Delhi. Write the notice.

Or

You are a head boy/girl, of Delhi Public School, Jalandhar. At your school, during the departure time, the students create indiscipline. Your school Principal has asked you to draft a notice for the students of your school making an apparel to maintain discipline during the departure time. **(5)**

9. You are Mohit/ Mehak. Your friend is very fond of buying and reading good books. Write a letter to him/her inviting him/her to visit the International Book Fair which is going on in your city.

You can include:

- *opportunity not to be missed*
- *going on in the Pragati Maidan, Delhi*
- *National and International publishers are participating*

Or

Your school is going to organise a 10 days residential camp in your school campus, in which so many workshops, to

- iii. a false and imaginary story
- iv. an interesting story
- d. This car **cost** me **an arm and a leg** and you say it is not good at all.
 - i. is expensive ii. is value for money
 - iii. is quite cheap iv. is quite affordable
- e. I am still not used to the glamorous life of Bollywood. I continue to feel **like a fish out of water** here.
 - i. sick and tired ii. curious and excited
 - iii. awkward and uncomfortable
 - iv. surrounded by enemies

8. As a Senior NCC Cadet of D. A. V. Public School, Kurukshetra, you have been asked to draft a notice about a 10 day NCC training camp to be held in Delhi. Write the notice.

Or

You are a head boy/girl, of Delhi Public School, Jalandhar. At your school, during the departure time, the students create indiscipline. Your school Principal has asked you to draft a notice for the students of your school making an apparel to maintain discipline during the departure time. **(5)**

9. You are Mohit/ Mehak. Your friend is very fond of buying and reading good books. Write a letter to him/her inviting him/her to visit the International Book Fair which is going on in your city.

You can include:

- *opportunity not to be missed*
- *going on in the Pragati Maidan, Delhi*
- *National and International publishers are participating*

Or

Your school is going to organise a 10 days residential camp in your school campus, in which so many workshops, to

polish the skills of the students, will be conducted. Write a letter to your parents to ask for permission to join the camp.

You can include:

- *inform them about the camp*
 - *explain your wish to join the camp*
 - *seek their permission and also request them to send you the money*
- (6)**

10. You are Amit/ Amita, a student of class VIII. You feel pained to see animals being treated mercilessly. Write a debate in favour of 'Do Animals have rights?'

You can include:

- *say how important they are, to maintain environmental balance*
- *man, the only animal, kills for pleasure*
- *animals kept in cages for scientific experiments*
- *they are subjected to cruelty, circus, road shows*
- *mention bulls, horses, donkeys carry heavy loads*
- *state the need of protests, rallies against the sale of animal products*

Or

You are Ranbir/Rekha. Write an article on the topic 'How to promote sports and games'.

You can include:

- *sports and games - a compulsory subject at school level*
 - *ask for liberal financial assistance to sports person*
 - *need for developing sports infrastructure*
 - *no politics should be there in sports*
- (6)**

polish the skills of the students, will be conducted. Write a letter to your parents to ask for permission to join the camp.

You can include:

- *inform them about the camp*
 - *explain your wish to join the camp*
 - *seek their permission and also request them to send you the money*
- (6)**

10. You are Amit/ Amita, a student of class VIII. You feel pained to see animals being treated mercilessly. Write a debate in favour of 'Do Animals have rights?'

You can include:

- *say how important they are, to maintain environmental balance*
- *man, the only animal, kills for pleasure*
- *animals kept in cages for scientific experiments*
- *they are subjected to cruelty, circus, road shows*
- *mention bulls, horses, donkeys carry heavy loads*
- *state the need of protests, rallies against the sale of animal products*

Or

You are Ranbir/Rekha. Write an article on the topic 'How to promote sports and games'.

You can include:

- *sports and games - a compulsory subject at school level*
 - *ask for liberal financial assistance to sports person*
 - *need for developing sports infrastructure*
 - *no politics should be there in sports*
- (6)**

घ- निम्नलिखित शब्दों के वर्ण विच्छेद कीजिए: (2)

कुसुमावलि, प्रांजल

ड- वाक्यांश के लिए एक शब्द लिखिए। (2)

जिसको साधना मुश्किल हो, दर्द से भरा हुआ

च - निम्नलिखित श्रुतिसमभिनार्थक शब्दों का वाक्य में प्रयोग कीजिए। (2)

पवन - पावन

छ- निम्नलिखित शब्दों की भाववाचक संज्ञा बनाइए: (2)

ईमानदार, डाकू

6-व्यवाहारिक व्याकरण: (2×7=14)

निर्देशानुसार उत्तर दीजिए (कोई सात भाग करो)

क. निम्नलिखित शब्दों के दो- दो पर्यायवाची शब्द लिखें:-- आभूषण , इच्छा

ख . निम्नलिखित शब्दों के भिन्नार्थक शब्द लिखिए-

अचार - आचार, अपेक्षा- उपेक्षा

ग. निम्नलिखित शब्दों का समास विग्रह कीजिए।

पंचतंत्र , गुरु दक्षिणा

घ. निम्नलिखित समास विग्रह शब्दों के सामासिक पद बनाइए :

पथ से भ्रष्ट, खरा या खोटा

ड. निम्नलिखित शब्दों की भाववाचक संज्ञा बनाइए:

गहरा , थकना

च. निम्नलिखित वाक्यों के लिंग परिवर्तन करके खाली स्थान भरिए:

1. मुझे केवल एकऔर गायिका की आवाज सुरीली लगी।

2. ठाकुर और..... दोनों ही क्रोधी स्वभाव के हैं।

छ. निम्नलिखित रेखांकित वाक्यों के वचन बदलकर वाक्य पुन :लिखिए:

1. नहर में पानी बढ़ जाने से सड़क पर भी पानी भर गया।

2. इस दवाई को बच्चे से दूर रखो।

ज. निम्नलिखित वाक्यों में कारक पहचान कर उसका भेद बताएं:

1. शिक्षक दिवस पर बच्चों ने गुरु जी को उपहार दिया।

2. पेड़ से पत्ते गिर गए।



भगवान महावीर पब्लिक सीनियर सेकेंडरी स्कूल बंग

कक्षा -आठवीं

विषय - हिंदी.

कूल अंक-8।

1- अपठित गद्यांश को पढ़कर पूछे गए प्रश्नों के उत्तर दीजिए। (5)

सही समय पर सही चुनाव करने वाला व्यक्ति सदैव सफलता प्राप्त करता है चुनाव में असावधान व्यक्ति कभी सफलता की चोटी पर नहीं चढ़ पाता ।जो व्यक्ति अपने दैनिक कार्यक्रमों में सजगता के साथ उपयुक्त चुनाव नहीं करत और महत्व की दृष्टि से उनमें ठीक-ठीक क्रम नहीं बिठा पाता ,वह व्यक्ति न ठीक समय पर कोई कार्य पूरा कर सकता है और न अपने कामों को श्रेष्ठता और कलात्मकता ही दे पाता है ।होना यह चाहिए कि हम सोच - समझकर त करें कि हमें किस समय उठना है ,किस समय सोना है और किस समय ,क्या और कितना खाना है तथा किस समय अध्ययन करना है। खेल-कूद और व्यायाम के लिए समय का चुनाव करना है ।चुनाव करते समय हमें अपने मित्रों के प्रति भी बहुत सावधानी बरतनी होगी। यह चुनाव हमारे जीवन की अनेक सफलताओं और असफलताओं के लिए जिम्मेदार होता है ।सच्चा मित्र जहां हमें सन्मार्ग पर ले जाता है, वहीं कुमित्र पतन के गर्त में ढकेल देता है तथा हमारे जीवन को अनेक दुर्गुणों से भर देता है।

क- जीवन में सफलता प्राप्त करने के लिए सबसे महत्वपूर्ण क्या है?

ख- किस प्रकार के व्यक्ति अपने कार्य को सुंदर और कलात्मक ढंग से व्यक्त नहीं कर पाते ?

ग- हमें अपने मित्रों के चुनाव में भी सावधानी क्यों बर्तनी चाहिए ?

घ- सच्चा मित्र और कुमित्र हमारे जीवन को किस प्रकार प्रभावित करता है ?

ड- उत्थान का विपरीतार्थक शब्द क्या है ?

(ii) उनका प्राण एक सूत्र में बंधा था।

7. निम्नलिखित मुहावरों के अर्थ बताते हुए उनका वाक्य प्रयोग कीजिए: (2×3=6)

अपना उल्लू सीधा करना, आकाश से बातें करना,
आग में घी डालना, आसमान पर थूकना

8-रचनात्मक लेखन (20)

क. किसी दूसरे स्कूल की क्रिकेट टीम के साथ क्रिकेट मैच खेलने के लिए अनुमति मांगने हेतु विद्यालय के प्रधानाचार्य को पत्र लिखिए। (5)

अथवा

अपने क्षेत्र में देर रात तक बजने वाले लाउडस्पीकर बंद करवाने के लिए संबंधित अधिकारी का ध्यान दिलाने हेतु किसी समाचार पत्र के संपादक को पत्र लिखिए।

ख. निम्न में से किसी एक विषय पर डायरी लेखन कीजिए: (5)

आज आपने एक अंधे व्यक्ति की सहायता की, उस समय आपके मन में जो भाव उमड़कर आए उसे डायरी के रूप में लिखिए।

अथवा

लेखन प्रतियोगिता में प्रथम आने पर आपको प्रधानाचार्य द्वारा सम्मानित किया गया है इससे मिलने वाली खुशी को डायरी के रूप में व्यक्त कीजिए।

ग. मान लीजिए आप विवेकानंद स्कूल, विवेक विहार की हिंदी विभाग की अध्यक्ष हैं। आपके विभाग की ओर से छात्र-छात्राओं की कविता प्रतियोगिता करवाई जा रही है, उसमें भाग लेने हेतु छात्रों को सूचित करते हुए 40- 50 शब्दों में सूचना लेखन दीजिए। (5)

अथवा

आपके स्कूल में स्वास्थ्य व कल्याण विभाग के द्वारा आंखों की जांच का निःशुल्क कैंप लगाया जा रहा है। सभी छात्रों को इसमें शामिल होने के लिए व इसका लाभ उठाने के लिए सूचना लेखन कीजिए।

घ. निम्नलिखित में से किसी एक विषय पर आकर्षक विज्ञापन तैयार कीजिए:

किसी प्रसिद्ध साइकिल कंपनी द्वारा उसकी बिक्री हेतु आकर्षक विज्ञापन तैयार कीजिए।

अथवा

बच्चों के रेडीमेड कपड़ों के नए खुले शोरूम (Kids zone) के लिए एक आकर्षक विज्ञापन तैयार करो।

7. निम्नलिखित मुहावरों के अर्थ बताते हुए उनका वाक्य प्रयोग कीजिए: (2×3=6)

अपना उल्लू सीधा करना, आकाश से बातें करना,
आग में घी डालना, आसमान पर थूकना

8-रचनात्मक लेखन (20)

क. किसी दूसरे स्कूल की क्रिकेट टीम के साथ क्रिकेट मैच खेलने के लिए अनुमति मांगने हेतु विद्यालय के प्रधानाचार्य को पत्र लिखिए। (5)

अथवा

अपने क्षेत्र में देर रात तक बजने वाले लाउडस्पीकर बंद करवाने के लिए संबंधित अधिकारी का ध्यान दिलाने हेतु किसी समाचार पत्र के संपादक को पत्र लिखिए।

ख. निम्न में से किसी एक विषय पर डायरी लेखन कीजिए: (5)

आज आपने एक अंधे व्यक्ति की सहायता की, उस समय आपके मन में जो भाव उमड़कर आए उसे डायरी के रूप में लिखिए।

अथवा

लेखन प्रतियोगिता में प्रथम आने पर आपको प्रधानाचार्य द्वारा सम्मानित किया गया है इससे मिलने वाली खुशी को डायरी के रूप में व्यक्त कीजिए।

ग. मान लीजिए आप विवेकानंद स्कूल, विवेक विहार की हिंदी विभाग की अध्यक्ष हैं। आपके विभाग की ओर से छात्र-छात्राओं की कविता प्रतियोगिता करवाई जा रही है, उसमें भाग लेने हेतु छात्रों को सूचित करते हुए 40- 50 शब्दों में सूचना लेखन दीजिए। (5)

अथवा

आपके स्कूल में स्वास्थ्य व कल्याण विभाग के द्वारा आंखों की जांच का निःशुल्क कैंप लगाया जा रहा है। सभी छात्रों को इसमें शामिल होने के लिए व इसका लाभ उठाने के लिए सूचना लेखन कीजिए।

घ. निम्नलिखित में से किसी एक विषय पर आकर्षक विज्ञापन तैयार कीजिए:

किसी प्रसिद्ध साइकिल कंपनी द्वारा उसकी बिक्री हेतु आकर्षक विज्ञापन तैयार कीजिए।

अथवा

बच्चों के रेडीमेड कपड़ों के नए खुले शोरूम (Kids zone) के लिए एक आकर्षक विज्ञापन तैयार करो।

- ਸ) 1. ਸਹੀ ਵਿਸਮਕ ਵਾਲਾ ਵਾਕ ਚੁਣੋ।
- ਅਫਸੋਸ ਮੇਰਾ ਕੁਝ ਨਹੀਂ ਬਣਿਆ।
 - ਅਫਸੋਸ! ਮੇਰਾ ਕੁਝ ਨਹੀਂ ਬਣਿਆ।
 - ਅਫਸੋਸ ਮੇਰਾ ! ਕੁਝ ਨਹੀਂ ਬਣਿਆ।
2. ਖੁਸ਼ ਰਹੋ! ਜੁਗ ਜੁਗ ਜੀਓ! ਇਹ ਕਿਹੜੇ ਵਿਸਮਿਕ ਹਨ।
ਪ੍ਰਸੰਸਾ ਵਾਚਕ ਵਿਸਮਕ ਅਸੀਸ ਵਾਚਕ ਵਿਸਮਕ ਫਿਟਕਾਰ ਵਾਚਕ ਵਿਸਮਕ
- ਹ) 1. 'ਮਹਿੰਗਾ' ਦਾ ਵਿਰੋਧੀ ਸ਼ਬਦ ਲਿਖੋ।
ਮਹਿੰਗੀ ਸਸਤਾ ਚੌਗੁਣਾ
2. 'ਬੁੱਢਾ' ਦਾ ਵਿਰੋਧੀ ਸ਼ਬਦ ਲਿਖੋ।
ਜਵਾਨ ਬਚਪਨ ਬਜ਼ੁਰਗ
- ਕ) 1. 'ਵਰਖਾ' ਦੇ ਸਮਾਨ -ਆਰਥਕ ਸ਼ਬਦ ਚੁਣੋ।
ਬਰਖਾ ਬਸੰਤ ਬਰਸਾਤ ਮੀਂਹ ਪਾਣੀ ਹੜ
2. 'ਅੱਡ' ਦਾ ਇੱਕ ਅਰਥ ਹੈ ਵੱਖ ਇੱਕ ਹੋਰ ਅਰਥ ਦੱਸੋ।
ਭਿੰਨ ਸਾਡਾ ਤੁਹਾਡਾ
- ਖ) ਵਾਕ ਸੁੱਧ ਕਰੋ।
1. ਪਾਨੀ ਹੀ ਜਿਵਨ ਹੋ।
 2. ਕੁਡਿਓ ਚਪ ਹੋ ਜਾਓ।

11. ਹੇਠ ਲਿਖਿਆਂ ਵਿੱਚੋਂ ਕੋਈ ਇੱਕ ਕਰੋ-

(4)

ਗੁਆਚੇ ਬੈਗ ਦੀ ਭਾਲ ਸਬੰਧੀ ਇਸ਼ਤਿਹਾਰ ਲਿਖੋ।

ਜਾਂ

ਵਿਦਿਆ ਪੜ੍ਹਾਈ ਤੇ ਦੇ ਨਾਅਰੇ ਲਿਖੋ।

12. ਇਹ ਇੱਕ ਪੱਤਰ ਕਰੋ।

ਸਾਡਾ ਭਰਾ ਮੇਥਾਈਲ ਫੋਨ ਬਹੁਤ ਦੇਖਦਾ ਹੈ ਉਸ ਨੂੰ ਫੋਨ ਦੇ ਨੁਕਸਾਨ ਦੱਸਦੇ ਹੋਏ ਪੜ੍ਹਾਈ ਲਈ ਪ੍ਰੇਰਿਤ ਕਰੋ।

ਜਾਂ

ਆਪਣੇ ਪਿਤਾ ਜੀ ਤੋਂ ਪੈਸੇ ਮੰਗਵਾਉਣ ਲਈ ਪੱਤਰ ਲਿਖੋ।

13. ਕੋਈ ਇੱਕ ਲੇਖ ਲਿਖੋ।

(7)

ਮਹਾਤਮਾ ਬੁੱਧ

ਜਾਂ

ਸ੍ਰੀ ਗੁਰੂ ਗੋਬਿੰਦ ਸਿੰਘ ਜੀ



Bhagwan Mahaveer Public Senior Secondary School

Class 8th V (2023-24)

Subject : Punjabi Term-I

M.M 80

1. ਸਾਰੇ ਪ੍ਰਸ਼ਨ ਸੁੰਦਰ ਲਿਖਾਈ ਵਿੱਚ ਹੱਲ ਕਰੋ।

ਮੋਹਨ ਉਸ ਸਮੇਂ ਨੌਵੀਂ ਵਿੱਚ ਪੜ੍ਹਦਾ ਸੀ ਕਿ ਉਸ ਦੇ ਪਿਤਾ ਦੀ ਮੌਤ ਹੋ ਗਈ ਸਾਰੀਆਂ ਘਰ ਦੀਆਂ ਜ਼ਿੰਮੇਵਾਰੀਆਂ ਉਸਦੀ ਸਿਰ ਤੇ ਪੈ ਗਈਆਂ ਉਸਦੀ ਖੇਡਣ, ਮਲਣ, ਬਚਪਨ ਦੀ ਉਮਰ ਦੇ ਵਿੱਚ ਕੁਝ ਗਰੀਬੀ ਅਤੇ ਕੰਗਾਲੀ ਆ ਗਈ। ਉਸ ਦੀਆਂ ਚਾਰ ਭੈਣਾਂ ਵੀ ਉਸਦੇ ਬੁਰੇ ਤੇ ਭਾਰ ਬਣ ਕੇ ਖੜੀਆਂ ਸਨ। ਉਸਦੇ ਪਿਤਾ ਦਾ ਕਰਜ਼ਾ ਸੂਰਜ ਦੀ ਹਰ ਪਹਿਲੀ ਕਿਰਨ ਨਾਲ ਵੱਧਦਾ ਜਾਂਦਾ ਸੀ। ਉਸ ਨਿੱਕੇ ਜਿਹੇ ਪਰ ਹੌਸਲੇ ਵਾਲੇ ਮੋਹਨ ਨੇ ਦਿਲ ਨਾ ਛੱਡਿਆ। ਉਸ ਨੇ ਪੜ੍ਹਾਈ ਛੱਡ ਦਿੱਤੀ ਕੰਮ ਲਈ ਟੱਕਰਾਂ ਮਾਰਨੀਆਂ ਸ਼ੁਰੂ ਕਰ ਦਿੱਤੀਆਂ ਕਈ ਧੱਕੇ ਖਾਧੇ। ਕਈ ਪਾਪੜ ਵੇਲੇ, ਸਫਲਤਾ ਨਜ਼ਰ ਨਹੀਂ ਆਈ। ਅਕਿਸੇ ਮਿੱਠੀ ਜਿਹੀ ਕੁੜੀ ਨੇ ਉਸਨੂੰ ਸਹਾਰਾ ਦਿੱਤਾ। ਉਸ ਦੇ ਜੀਵਨ ਵਿੱਚ ਮਹਾਨ ਪਰਿਵਰਤਨ ਲਿਆ ਦਿੱਤਾ। ਵਿਹਲੜ, ਗਲੀਆਂ ਕੱਢਣ ਵਾਲਾ ਮੋਹਨ ਹੁਣ ਮਿਹਨਤੀ ਬਣ ਗਿਆ ਉਸ ਨੇ ਪੜ੍ਹਾਈ ਮੁੜ ਸ਼ੁਰੂ ਕਰ ਦਿੱਤੀ ਹੌਲੀ ਹੌਲੀ ਉਹ ਬੀ.ਏ.ਵੀ ਪਾਸ ਕਰ ਗਿਆ ਤਾਂ ਇਹ ਚਾਚੇ ਜੇ ਉਸ ਦੇ ਖੂਨ ਦੇ ਪਿਆ ਸਨ ਉਸ ਵੱਲ ਕੁਝ ਆਸਾ ਭਰੀਆਂ ਅੱਖਾਂ ਦੇ ਨਾਲ ਤੱਕਣ ਲੱਗ ਪਏ ਹਨ ਉਸ ਨੇ ਭੈਣਾਂ ਦੇ ਵਿਆਹ ਕਰਕੇ ਕਰਜ਼ਾ ਵੀ ਲਾ ਦਿੱਤਾ ਕੇਵਲ ਇਸ ਤਰ੍ਹਾਂ ਕਿਸੇ ਦੇ ਹੌਸਲੇ ਅਤੇ ਆਪਣੀ ਮਿਹਨਤ ਦੇ ਨਾਲ ਅੱਜ ਉਹ ਖੁਸ਼ੀਆਂ ਭਰੀਆਂ ਮੌਜਾਂ ਵਾਲਾ ਜੀਵਨ ਮਾਣ ਰਿਹਾ ਹੈ।

1. ਮੋਹਨ ਦੇ ਸਿਰ ਤੇ ਜਾ ਜ਼ਿੰਮੇਵਾਰੀਆਂ ਪਈਆਂ ਤਦੋਂ ਕਿਹੜੀ ਕਲਾਸ ਵਿੱਚ ਪੜ੍ਹਦਾ ਸੀ?

2. ਮੋਹਨ ਨੇ ਗਰੀਬੀ ਦੇ ਦਿਨ ਕਿਵੇਂ ਗੁਜ਼ਾਰੇ?

3. ਉਸ ਦੇ ਜੀਵਨ ਵਿੱਚ ਕਿਵੇਂ ਤੇ ਕਿਸ ਨੇ ਤਬਦੀਲੀ ਲਿਆਂਦੀ?

4. ਮੋਹਨ ਜੀਵਨ ਵਿੱਚ ਕਿਵੇਂ ਸਫਲ ਹੋ ਗਿਆ?

5. ਮੋਹਨ ਨੇ ਕਿੱਥੇ ਤੱਕ ਪੜ੍ਹਾਈ ਕੀਤੀ?

6. ਪਿਤਾ ਦੀ ਮੌਤ ਸਮੇਂ ਮੋਹਨ ਕਿਹੜੀ ਜਮਾਤ ਵਿੱਚ ਪੜ੍ਹਦਾ ਸੀ ਉਸ ਉੱਤੇ ਕਿਹੜੀ ਜ਼ਿੰਮੇਵਾਰੀ ਆ ਗਈ?

2. ਹੇਠਾਂ ਲਿਖੀ ਕਾਵ ਟੁਕੜੀ ਨੂੰ ਪੜ੍ਹੋ ਅਤੇ ਪ੍ਰਸ਼ਨਾਂ ਦੇ ਉੱਤਰ ਦਿਓ-

(4)

ਗੁਰੂਆਂ ਪੀਰਾਂ ਦੀ ਇਹ ਧਰਤੀ,

ਇਸ ਤੋਂ ਸਦਕੇ ਜਾਵਾਂ।

ਭਗਤ ਸੁਖਦੇਵ ਸਰਾਬੇ,

ਜੰਮਣ ਇੱਥੇ ਮਾਵਾਂ।

ਇਸ ਧਰਤੀ ਨੇ ਪੈਦਾ ਕੀਤੇ,

ਯੋਧੇ ਤੇ ਬਲਕਾਰੀ।

ਮੈਂ ਗੱਭਰੂ ਪੰਜਾਬ ਦਾ,

ਮੈਨੂੰ ਜਾਣੇ ਦੁਨੀਆ ਸਾਰੀ।

ੳ) ਮਾਵਾਂ ਕਿਹੋ ਜਿਹੇ ਪੁੱਤਰਾਂ ਨੂੰ ਜਨਮ ਦਿੰਦੀਆਂ ਹਨ?

ਅ) ਪੰਜਾਬ ਦੇ ਜਵਾਨਾਂ ਦਾ ਦੁਨੀਆਂ ਕੀ ਮੰਨਦੀ ਹੈ?

ੲ) ਸਾਡੀ ਧਰਤੀ ਕਿਸ ਦੀ ਧਰਤੀ ਹੈ?

ਸ) ਕਵੀ ਧਰਤੀ ਬਾਰੇ ਕੀ ਆਖਦਾ ਹੈ?

3. ਬਹੁ- ਵਿਕਲਪੀ ਪ੍ਰਸ਼ਨਾਂ ਦੀ ਉੱਤਰ ਦਿਓ- (5)

ੳ) ਗੁਰੂ ਗੋਬਿੰਦ ਤੇਗ ਬਹਾਦਰ ਜੀ ਦਾ ਸੀਸ ਦਿੱਲੀ ਤੋਂ ਅਨੰਦਪੁਰ ਸਾਹਿਬ ਕੌਣ ਲੈ ਕੇ ਆਇਆ?
ਭਾਈ ਮਤੀ ਦਾਸ ਜੀ ਭਾਈ ਸਤੀ ਦਾਸ ਜੀ ਗੋਬਿੰਦ ਰਾਏ ਭਾਈ ਜੈਤਾ ਜੀ

ਅ) ਵੱਟਣਾ ਕਿੱਥੇ ਬਿਠਾ ਕੇ ਲਗਾਇਆ ਜਾਂਦਾ ਹੈ?

ਚੱਕੀ ਤੇ ਕੁਰਸੀ ਤੇ ਮੰਜੇ ਤੇ ਮੇਜ਼ ਤੇ

ੲ) ਸੰਸਾਰਿਕ ਦੁੱਖਾਂ ਦਾ ਕੀ ਕਾਰਨ ਹੈ ਇਸ਼ਾਵਾਂ ਅਤੇ ਲਾਲਸਾਵਾਂ
ਬਿਮਾਰੀਆਂ ਮੌਤ ਕੰਮ ਕਾਰ

ਸ) ਗੁਰੂ ਘਰ ਦੀ ਕਿਹੜੀ ਵਿਸ਼ੇਸ਼ਤਾ ਨਹੀਂ ਹੈ?

ਸਭ ਸਮਾਨ ਹਨ ਸੰਗਤ ਤੇ ਪੰਗਤ ਫਰਕ ਕੀਤਾ ਜਾਂਦਾ ਹੈ ਮਰਿਆਦਾ

ਹ) ਪਰਿਵਾਰ ਦੀ ਸ਼ਾਨ ਕੌਣ ਵਧਾਉਂਦੇ ਹਨ?

ਬਜ਼ੁਰਗ ਨੌਕਰ ਪੈਸੇ ਭਾਂਡੇ

4. ਹੇਠਾਂ ਲਿਖਿਆ ਵਿੱਚੋਂ ਚਾਰ ਪ੍ਰਸ਼ਨਾਂ ਦੇ ਉੱਤਰ 20- 25 ਸ਼ਬਦਾਂ ਵਿੱਚ ਦਿਓ- (8)

ੳ) ਵਿਰਾਟ ਨੇ ਗੁਰੂ ਰਾਮਦਾਸ ਲੰਗਰ ਹਾਲ ਬਾਰੇ ਕੀ ਕੁਝ ਦੱਸਿਆ?

ਅ) ਬਗੜ ਭੇਲੀ ਕੌਣ ਲੈ ਕੇ ਜਾਂਦਾ ਹੈ?

ੲ) ਗੁਰੂ ਤੇਗ ਬਹਾਦਰ ਜੀ ਕੋਲ ਧਰਮ ਦੀ ਰੱਖਿਆ ਦੀ ਫਰਿਆਦ ਲੈ ਕੇ ਕੌਣ ਆਇਆ ਸੀ?

ਸ) ਮਹਾਤਮਾ ਬੁੱਧ ਜੀ ਨੂੰ ਗਿਆਨ ਦੀ ਪ੍ਰਾਪਤੀ ਕਿੱਥੇ ਹੋਈ?

ਹ) ਅਸੀਂ ਕੀਮਤੀ ਉਪਹਾਰ ਕਿਵੇਂ ਪਾ ਸਕਦੇ ਹਾਂ?

5. ਕਿਸੇ ਇੱਕ ਪ੍ਰਸ਼ਨ ਦਾ ਉੱਤਰ ਵਿਸਥਾਰ ਵਿੱਚ ਦਿਓ (3)

ੳ) ਨਿਰਵਾਣ ਤੋਂ ਕੀ ਭਾਵ ਹੈ?

ਅ) ਲੰਗਰ ਸੰਸਥਾ ਤੋਂ ਕੀ ਭਾਵ ਹੈ? ਆਪਣੀ ਵਿਚਾਰ ਪ੍ਰਗਟ ਕਰੋ।

6. ਹੇਠਾਂ ਦਿੱਤੇ ਕਿਸੇ ਪੰਜ ਸ਼ਬਦਾਂ ਨੂੰ ਵਾਕਾਂ ਵਿੱਚ ਵਰਤੋ (5)

ਮੁੰਦਰਤਾ, ਯਾਤਰਾ, ਅਨਮੋਲ, ਜਾਗੀਰਾਂ, ਗੁਰਪੁਰਬ, ਅਸਰ

7. ਹੇਠਾਂ ਲਿਖੇ ਸ਼ਬਦਾਂ ਦੇ ਅਰਥ ਲਿਖੋ (4)

ਉਪਹਾਰ, ਕਠੋਰ, ਅਪਮਾਨ, ਪੰਗਤ, ਉਚੇਚਾ

8. ਖਾਲੀ ਥਾਵਾਂ ਭਰੋ- (3)

ੳ) ਜ਼ਿਆਦਾਤਰ ----- ਆਪਣੇ ਝੂਠੇ ਬਰਤਨ ਆਪ ਸਾਫ਼ ਕਰਦੇ ਹਨ।

ਅ) ਉਹਨਾਂ ਨੇ ਜੰਗਲ ਵਿੱਚ ----- ਤਪੱਸਿਆ ਕੀਤੀ।

ੲ) ਵਿਆਹ ਵਾਲੇ ਮੁੰਡੇ ਨਾਲ ----- ਵੀ ਤਿਆਰ ਹੁੰਦਾ ਹੈ।

9. ਪਾਠ ਪੁਸਤਕ ਅਭਿਆਸ ਕੋਈ ਛੇ ਭਾਗ ਹੱਲ ਕਰੋ (12)

ੳ) ਬਹੁਤੇ ਸ਼ਬਦਾਂ ਦੀ ਥਾਂ ਇੱਕ ਸ਼ਬਦ ਲਿਖੋ।

1. ਜਿਹੜਾ ਬੱਚਾ ਘਰ ਵਿੱਚ ਸਭ ਤੋਂ ਪਹਿਲਾਂ ਜੰਮਿਆ ਹੋਵੇ।

2. ਆਗਿਆ ਦਾ ਪਾਲਣ ਕਰਨ ਵਾਲਾ।

ਅ) ਸ਼ੁੱਧ ਸ਼ਬਦਾਂ ਦੀ ਚੋਣ ਕਰੋ

1. ਰੋਗਿਆਂ, ਰੋਗੀਆਂ, ਰੁਗਿਆਂ

2. ਸਿੱਧਾ, ਸਿੱਦਾ, ਸੀਧਾ

ੲ) 1. 'ਰੋਗੀ' ਦਾ ਵਿਰੋਧੀ ਸ਼ਬਦ ਚੁਣੋ।

ਮਾੜਾ, ਅਰੋਗੀ, ਕਮਜ਼ੋਰ

2. 'ਅਪਮਾਨ' ਦਾ ਵਿਰੋਧੀ ਸ਼ਬਦ ਚੁਣੋ।

ਸਤਿਕਾਰ, ਨਿਰਾਦਰ, ਬੇਇੱਜ਼ਤੀ

ਸ) 1. 'ਫੋਟੋ' ਦਾ ਸਮਾਨ - ਆਰਥਕ ਸ਼ਬਦ ਲਿਖੋ।

2. 'ਸਾਥੀ' ਦਾ ਸਮਾਨ - ਆਰਥਕ ਸ਼ਬਦ ਲਿਖੋ।

ਹ) 1. 'ਇਸ ਕਰਕੇ' ਕਿਹੜਾ ਕਿਰਿਆ ਵਿਸ਼ੇਸ਼ਣ ਹੈ?

ਸੰਖਿਆਵਾਚਕ ਪ੍ਰਕਾਰ ਵਾਚਕ ਗੁਣਵਾਚਕ ਕਾਰਨ ਵਾਚਕ

2. ਜੋ ਸ਼ਬਦ ਨਾਂਵ ਦੀ ਥਾਂ ਤੇ ਵਰਤ ਜਾਂਦੇ ਹਨ ਉਸ ਨੂੰ ਕੀ ਕਹਿੰਦੇ ਹਨ?

ਨਾਂਵ ਪੜਨਾਂਵ ਕਿਰਿਆ

ਕ) 1. 'ਅੱਤ ਚੁੱਕਣੀ' ਮੁਹਾਵਰੇ ਦਾ ਅਰਥ ਲਿਖੋ।

2. 'ਇੱਕ ਮੁੱਠ ਹੋਣਾ' ਮੁਹਾਵਰੇ ਦਾ ਅਰਥ ਲਿਖੋ।

ਖ) 1. 'ਲੜਕਾ ਗੀਤ ਗਾ ਰਿਹਾ ਹੈ' ਵਾਕ ਵਿੱਚ ਲੜਕਾ ਕੀ ਹੈ?

ਕਰਮ ਕਰਤਾ ਪੜਨਾਵ ਵਿਸ਼ੇਸ਼ਣ

2. ਅਸੀਂ ----- ਖੇਡਾਂਗੇ। (ਨਿੱਜ ਵਾਚਕ ਪੜਨਾਵ ਲਿਖੋ)

10. ਵਿਆਕਰਨ ਭਾਗ ਹੱਲ ਕਰੋ- (12)

ੳ) 1. ਬੋਲੀ ਜਾ ਭਾਸ਼ਾ ਕਿਸ ਨੂੰ ਆਖਦੇ ਹਨ?

2. ਵਿਸ਼ਰਾਮ ਚਿੰਨ੍ਹ ਦੀ ਪਰਿਭਾਸ਼ਾ ਲਿਖੋ।

ਅ) 1. 'ਵਿਦਿਆਰਥੀ ਪੜ੍ਹ ਰਿਹਾ ਹੈ' ਵਾਕ ਦੀ ਲਿੰਗ ਬਦਲੀ ਕਰੋ।

2. 'ਸਹੇਲੀ' ਦਾ ਪੁਲਿੰਗ ਸ਼ਬਦ ਚੁਣੋ।

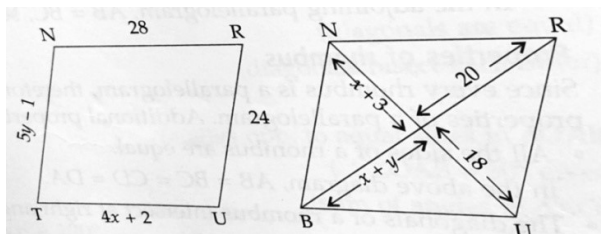
ਮਿਤਰੀ ਮਿੱਤਰ ਸਹੇਲਾ

ੲ) 1. 'ਬੱਚੇ ਨੇ ਰੌਲਾ ਪਾਇਆ' ਵਚਨ ਬਦਲੋ।

2. 'ਘਰ ਦੀ ਚਾਬੀ ਕਿੱਥੇ ਹੈ' ਵਚਨ ਬਦਲੋ।

Section- D**(4×5=20)**

35) In the adjoining figures, TURN and BURN are parallelograms. Find the measure of x and y.



36) Find the amount if ₹20,000 is invested at 10% per annum for 3 years compounded annually

Or

What sum of money will give amount to ₹3630 in two years at 10% per annum compounded annually?

37) 2 persons could fit window in house in 3 days.

- 1) One of the person fell ill before the work started. How long would the job take now?
- 2) how many persons would be needed to fit the window in one day?

38) A tower 24 metres high, casts a shadow of 16 metres. Find the height of a tree that casts a shadow of 12 metres under similar conditions.

Case study**(2×3=6)**

39. Anup after retirement thought to stay in village's house. After going there he found there was shortage of water in village, so he thought of constructing a well. He hired some labourers and guided them that well should be 7m in diameter and 20m deep.

**Bhagwan Mahaveer Public Senior Secondary School****Class 8th S+N (2024-25)****Subject : Mathematics****Term-I****M.M 8****(1×20=20)****Section - A**

- 1) Reciprocal of a negative number is
 - a) Positive
 - b) Negative
 - c) Can not say
 - d) Does not exist
- 2) The multiplicative inverse of $-\frac{3}{7}$ is
 - a) $\frac{7}{3}$
 - b) $-\frac{7}{3}$
 - c) $\frac{3}{7}$
 - d) none of these
- 3) The additive inverse of $\frac{2}{3}$ is $-\frac{2}{3}$ (True/False)
- 4) The solution of the equation $8x-3=2$ is
 - a. $\frac{1}{2}$
 - b) $\frac{5}{8}$
 - c) $\frac{3}{8}$
 - d) $\frac{1}{3}$
- 5) Zero has no Reciprocal. (True/False)
- 6) The sum of all exterior angle of a Pentagon is
 - a. 590°
 - b) 360°
 - c) 180°
 - d) none of these
- 7) Fill ups :- 9 sided polygon is called _____
- 8) True/False :- All squares are trapeziums.
- 9) A simple closed curve made up entirely of line segments is called a _____
- 10) Trapezium has one pair of parallel sides.(T/F)
- 11) Total surface area of cuboid _____
- 12) Area of trapezium _____
- 13) True/false: There is no difference between volume and capacity.
- 14) Area is measured in _____ units.
- 15) True/false : The interest paid by banks, post office, insurance companies is simple interest.
- 16) Formula of Amount=_____

17) Diagonals of a parallelogram bisect each other.

(True/false)

18) The reciprocal of $\frac{2}{3}$

19) **Assertion(A)** : Every integer is a rational number.

Reason (R) : Every rational number is an integer.

- a) Both A and R are true and R is the correct explanation of A
- b) Both A and R are true and R is the correct explanation of A
- c) Both A and R are true but R is not the correct explanation of A
- d) A is true but R is false

20) **Assertion (A)** : In a parallelogram, all sides are equal.

Reason (R) : In a parallelogram, the diagonals bisect each other.

- a) Both A and R are true and R is the correct explanation of A
- b) Both A and R are true and R is the correct explanation of A
- c) Both A and R are true but R is not the correct explanation of A
- d) A is true but R is false

Section - B

(2×8=16)

21) Write associative property for addition and multiplication.

22) Write multiplicative inverse of a) $\frac{2}{3}$ b) $-\frac{4}{7}$

23) Solve for x :- $4x+3=15$

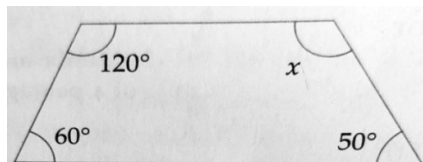
24) Solve for z:- $12z-4= 26$

25) Find the number of sides of a regular polygon whose each exterior angle has a measure of 45 degree.

26) Find 75% of 12.

Or

Find the value of x



27) The diagonals of a rhombus are 8cm and 15 cm. Find its area.

28) 8 pipes can fill a tank in 2 hours. How long will 5 pipe take to fill the same tank?

Or

If 7kg sugar costs ₹346.50, what is the cost of 12 kg sugar?

Section - C


(3×8=24)

29) Draw $\frac{2}{5}$, $\frac{4}{5}$ and $\frac{7}{5}$ on number line.

30) The measures of two adjacent angles of a parallelogram are in the ratio 4:5.find the measure of each angle of the parallelogram.

Or

Find the value of x,y and z in this parallelogram



31) Solve for x:- $5x-8= 7x+12$

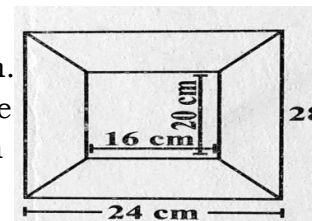
32) 72% Of 25 students are good in mathematics. How many are not good in mathematics?

33) The area of trapezium is 360 m², the distance between two parallel sides is 20 m and one of the parallel side is 25 cm. Find the other parallel side.

34) Find the volume of a cuboid whose length is 36 cm, breadth is 30cm and height is 24cm.

Or

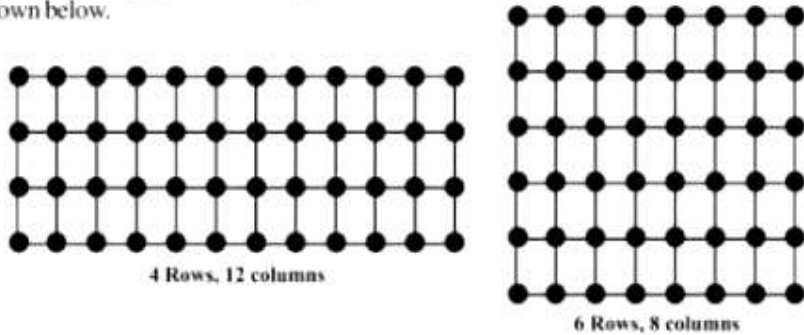
Diagram of the adjacent picture frame has outer dimensions= 24cm×28cm and inner dimensions 16cm×20cm. find the area of each section of the frame, if the width of each section is same.



Based on the above Information answer the following questions.

- 1) What is the shape of well ?
 (a) Cylinder (b) cone (c) None of these
 - 2) What is the radius of well ?
 (a) 7m (b) 14m (c) 3.5 m (d) None of these
 - 3) What is the total surface area of well ?
 (a) 715 m^2 (b) 157 m^2 (c) 517 m^2 (d) None of these
40. Harish took a squared paper and arranged some counters on it in different number of rows as shown below :

shown below.



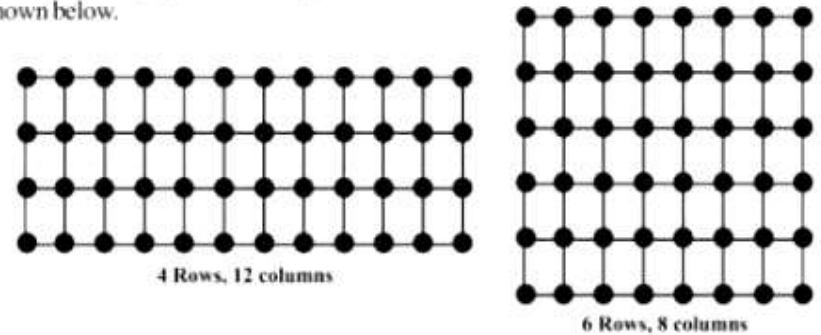
Number of Rows (R)	(R ₁)	(R ₂)	(R ₃)	(R ₄)	(R ₅)
	2	3	4	6	8
Number of Columns (C)	(C ₁)	(C ₂)	(C ₃)	(C ₄)	(C ₅)
	12	8	...

- 1) What is the number of rows if no. of columns is 8?
 a) 8 b) 5 c) 12 d) 6
- 2) What is the no. of rows if no. of columns is 12?
 a) 6 b) 4 c) 8 d) 12
- 3) What is the number of columns if no. of rows is 3?
 a) 5 b) 8 c) 12 d) 16

Based on the above Information answer the following questions.

- 1) What is the shape of well ?
 (a) Cylinder (b) cone (c) None of these
 - 2) What is the radius of well ?
 (a) 7m (b) 14m (c) 3.5 m (d) None of these
 - 3) what is the total surface area of well ?
 (a) 715 m^2 (b) 157 m^2 (c) 517 m^2 (d) None of these
40. Harish took a squared paper and arranged some counters on it in different number of rows as shown below :

shown below.



Number of Rows (R)	(R ₁)	(R ₂)	(R ₃)	(R ₄)	(R ₅)
	2	3	4	6	8
Number of Columns (C)	(C ₁)	(C ₂)	(C ₃)	(C ₄)	(C ₅)
	12	8	...

- 1) What is the number of rows if no. of columns is 8?
 a) 8 b) 5 c) 12 d) 6
- 2) What is the no. of rows if no. of columns is 12?
 a) 6 b) 4 c) 8 d) 12
- 3) What is the number of columns if no. of rows is 3?
 a) 5 b) 8 c) 12 d) 16

5. Case based studies .**4x1= 4****Read the passage and answer the questions that follow.**

LPG, the most popular and convenient domestic fuel, was first prepared by Dr Walter Snelling in 1910. The story goes that a car owner asked Dr Walter Snelling, a chemist, why the gasoline (petrol) he purchased was half gone by the time he got home. Dr Snelling investigated and found that the gasoline put in a jar got reduced and vapours were formed causing the cork to pop up. Investigating further, he was able to separate gasoline into its liquid and gaseous components. He discovered that a large part of liquid gasoline was composed of LPG including propane, butane and other hydrocarbons. He soon realised that LPG can be used for lighting, cooking and metal cutting. LPG is an odourless gas but a strong-smelling substance, ethyl mercaptan, is added to it

1. Which of the following statements is true about LPG?
 - a. It cannot be compressed.
 - b. It is a liquid.
 - c. It is a gas.
 - d. It is a liquid under pressure but becomes a gas.
2. Which of the following physical properties of LPG help in easy storage and transportation?
 - a. It can be compressed.
 - b. It is odourless.
 - c. It is in the liquified form.
3. Who prepared the LPG first?
4. Write any two uses of LPG.

**Bhagwan Mahaveer Public Senior Secondary Sch****TERM- I Class 8th(S+N) SCIENCE****Max Marks 80****Time allowed: 3****1. Multiple choice questions.****8x1= 8**

1. Which of the following is a modern irrigation technique
 - a. Moat
 - b. Rahat
 - c. Chain pump
 - d. Drip system
2. What cannot be obtained with fractional petroleum distillation
 - a. Paraffin wax
 - b. Gasoline
 - c. Kerosene
 - d. Coal gas
3. The zone with the maximum temperature in the flame
 - a. Luminous
 - b. Non-luminous
 - c. Dark
 - d. None of these
4. Which one of the following is not a fossil fuel
 - a. CNG
 - b. Coal
 - c. Biogas
 - d. Petro
5. Animals in a habitat are referred to as its
 - a. Flora
 - b. Fauna
 - c. Endangered species
 - d. None of these
6. Which of the following species is not extinct?
 - a. Dodo
 - b. Bison
 - c. Sikkim stag
 - d. None of these
7. The act of an ovary releasing an egg is known as :
 - a. Fertilisation
 - b. Ovulation
 - c. Reproduction
 - d. None of these
8. What one of the following is not an oviparous species?
 - a. Frog
 - b. Turtle
 - c. Sparrow
 - d. Ba

2. Fill in the blanks .**8x1= 8**

1. The process of supplying water to the crops at different intervals is known as _____.
2. _____ are used to store grains .
3. The main constituent of LPG is _____.
4. _____ is the best variety of coal.
5. The male gamete is referred to as _____.
6. The _____ in nature is disturbed, which which raises the likelihood of catastrophic disasters.

7. The temperature at which a substance begins to burn is referred to as _____.
8. When a material combines with _____ combustion occurs.

1. One mark questions. Attempt any 10 . 10x1=10

1. What is Irrigation ?
2. Define Harvesting.
3. Name the main constituent of LPG.
4. Write Full form of CNG.
5. Which zone of a candle flame has maximum Temperature?
6. What is combustion?
7. Describe IUCN.
8. List any two animal species that are extinct.
9. Name any two viviparous creatures.
10. Specify the two categories of gametes.

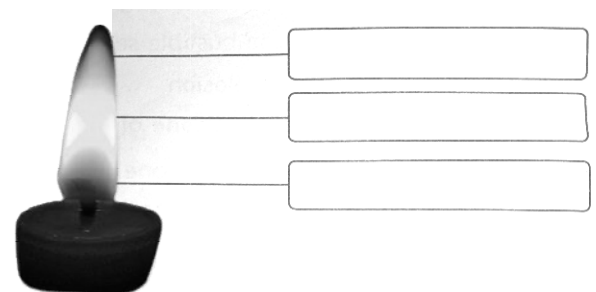
2. Two marks questions. Attempt any 8. 8x2=16

1. What are manures. Write their benefits.
2. What are Rabi and kharif crops? Give one example of each.
3. Differentiate between Petrol and diesel .
4. What are exhaustible and inexhaustible resources ?
5. List two negative effects of deforestation .
6. What is Red data book ?
7. Differentiate between sperm and ovum.
8. What are oviparous animals. Give an example.
9. What is project Tiger?

3. Three marks Questions. Attempt any 6. 6x3 = 18

1. Define the following
 - a) Agriculture
 - b) Ploughing
 - c) Weeding

2. Differentiate between coal tar and coal gas.
3. Describe the qualities of a good fuel.
4. What are combustible and non – combustible substances. Give examples of each.
5. What can we do to protect wildlife ?
6. Describe how binary fission occurs in amoeba using a labelled diagram.
7. Label the different zones of a candle flame in the following picture



4. Four marks questions. Attempt any 4. 4x4=16

1. How can we protect our crops. Write any Five points.
2. Suggest some practical ways to conserve natural Resources.
3. Describe the qualities of a good fuel.
4. What is deforestation? What constituents the primary cause of deforestation?
5. Using a labelled diagram, describe the butterfly 's life cycle.

- iii. Which system of land revenue was introduced by Thomas Munro ? Explain the two main features of this revenue system.
- iv. What is the importance of Project Tiger in the world ?
- v. Why are the natural resources unevenly distributed ?
- vi. List the Fundamental rights enjoyed by the Indian citizen
- vii. How can we ensure independence of Judiciary ?
- viii. Which factors gave rise to the Indian National Movement ?

9 Long Answer Questions (Do any Five) (3x5=15)

- 1. Describe any three developments which took place in India in the modern period ?
- ii. What is the difference between natural and human made resources .
- iii. Explain the reasons for water shortage of scarcity in different regions of the world .
- iv. What are Subordinate Courts? Discuss in detail .
- v. Explain with an example why do we require a law ?
- vi. Briefly discuss the role of the police in the British administration in India.

10. Case Study Based Question. (1x3=3)

Read the passage given below and answer the question that follow

Darshan Kumar was married to Rama, the daughter of Mr. Kushal Sharma. Darshan Kumar and his wife Rama, were living in a flat with their family members - Darshan's mother and younger brother.

A dreadful incident took place on 13th "December, 2002" when Rama got burnt Her life came to an end the same day in the hospital due to severe burnt. Rama's father, Mr. Kushal, filed a case in the Lower Court (District Court) against Darshan



Bhagwan Mahaveer Public Senior Secondary School
Class 8th Sid, Nanak (2024-25)
Subject : Social Science

Term-I

M.M

1. Tick ✓ The Correct Optional

MCQ

(1x10=10 Marks)

1. The tribes who moved from one place to another were called_____
 - A) Hunters B) Pastoral tribes C) Cultivator
2. Which one of the following can be melted and reused?
 - A) Iron B) Coal C) Petroleum
3. Who was the chairman of the Drafting committee?
 - A) Mahatma Gandhi B) Dr B.R Ambedkar
 - C) Sarojini Naidu
4. The first European traders to discover a new sea route to India were the--
 - A) Portuguese B) Dutch C) British
5. The President of India live in _____
 - A) Rashtrapati Bhawan B) Lal Qila C) Lok Sabha
6. Soil is formed by the process of.....
 - A) weathering B) Deposition C) Erosion
7. The judges of the Supreme court are appointed by the_____
 - A) The Prime minister of India
 - B) The President of India
 - C) The Home Minister of India
8. What was the strength of judges of the supreme court when the Indian Constitution was enacted?
 - A) Seven Judges B) Eight Judges C) Four Judges
9. The Peasants of Kerala were also called.....
 - A) Moplahs B) Peasants C) Madhyasree
10. Which of the following is NOT a human made resource
 - A) Technology B) Wildlife C) Road

2. Fill in the blanks.**(1x 6=6)**

- i. _____ Interest litigation can benefit the common people by providing the increase access to the courts.
- ii. The distribution of natural resource in this world is highly_____
- iii. Availability of renewable sources is_____
- iv. There are _____ fundamental rights.
- v. The Supreme Court is the highest court of India and is situated at_____
- vi. The leader of the Munda revolt was_____.

3 Write True/False**(1x6 = 6)**

- i. The British period in India is called colonial Period.
- ii. Vasco- da -Gama was the first to find out the new sea route to India.
- iii. Natural resources are NOT the free gift of nature.
- iv. Deforestation is the planting of trees
- v. The judges of the supreme court are appointed by the members of the Lok Sabha.
- vi. The Indian constitution is an unwritten documents.

4 Match the following**(1x6=6)**

- | | |
|------------------------------|-------------------------------|
| i. Tiger of Mysore | a. Conservation of Wild life. |
| ii. Father of constitution | b. Tipu Sultan |
| iii. Wildlife Protection Act | c. Dr B.R Ambedkar |
| iv. Vasco da Gama | d. Ryotwari system |
| v. Thomas Munro. | e. Nomadic tribes |
| vi. Criminal Tribes Act | f. Portuguese |

5.Unscramble the letter given in the help box and Fill in the blank.**(1x1 =1)**

- i. Dr Rajendra Prasad was the first.....

(Persident of India)

ii. 7 Assertion and Reason Based Questions.**1x1=1**

Assertion (A): All countries in the world are interdependent in terms of the availability of resources .

Reason(R): No country is self-sufficient .

- (a) Both A and R are true and R is the correct explanation of A.
- (b) Both A and R are true but R is not the correct explanation of A
- (c) A is true but R is false.
- (d) A is false but R is true

7. Very Short answer type questions**(1X10=10)**

- i. What is history as a Science ?
 - ii. Who was the First Indian to pass the Civil services examination
 - iii. Make a list of Crops which enabled the British to make profits ?
 - iv. Name the apex court for jurisdiction in India ?
 - v. What is resource ?
 - vi. Give two examples of renewable sources ?
 - vii. Which crop can be best grown in black soil ?
 - viii. Why were the British interested in the production of cash crops.
 - ix. What is Preamble ?
 - x. Who safeguard the fundamental nature of Indian political system .
- 8 Short Answer type Questions.(Do any Seven) (2x7=14)**
- i. Why did the British build record rooms along with their offices ?
 - ii. What can we do to conserve the resources at our domestic level ?

Kumar and his family members.

Darshan's neighbours stated that they had seen Rama with her sari in flames. They wrapped Rama in a blanket. They also claimed that Rama had told them that Nisha (Mother-in-law of Rama) had poured kerosene oil on her and Darshan (her husband) had lit the fire .


Questions :---

- i. When did the dreadful incident happen ?
- ii. Where did Ram's father Kaushal Sharma file the case?
- iii. Where did Darshan Kumar and his wife live?

11 Picture Based Question

Identify the *picture and Name them.* :-

1x3=3



Kumar and his family members.

Darshan's neighbours stated that they had seen Rama with her sari in flames. They wrapped Rama in a blanket. They also claimed that Rama had told them that Nisha (Mother-in-law of Rama) had poured kerosene oil on her and Darshan (her husband) had lit the fire .


Questions :---


- i. When did the dreadful incident happen ?
- ii. Where did Ram's father Kaushal Sharma file the case?
- iii. Where did Darshan Kumar and his wife live?

11 Picture Based Question

Identify the *picture and Name them.* :-

1x3






12. Map Based Question.

(1x5=5)

On the given Political map of India. Fill the following

(1x5=5)

- i. Any one British Territory in the Mid 18 th Century
- ii. Highest Mountain Peak of India
- iii. Any Ryotwari Settlement
- iv. Palk strait
- v . Bhils Tribe
- vi. Munda Region



12. Map Based Question.

(1x5

On the given Political map of India. Fill the following

(1x5

- i. Any one British Territory in the Mid 18 th Century
- ii. Highest Mountain Peak of India
- iii. Any Ryotwari Settlement
- iv. Palk strait
- v . Bhils Tribe
- vi. Munda Region

2. Nikhil visited a Zoo where he saw a variety of birds and animals. He captured a few photographs with a camera. In one photo, he is feeding the birds with other tourists. Which tool would you suggest to him to cut out his photo from the whole photo?
3. Divya wants to add some images on the web page. Which tag should she use to do this?
4. Aaha is looking for a tool to create a sunrise sky effect. Which option will you suggest, where he can mix two or more colors to get that effect?
5. Deepika wants to setup a server which manages all the network traffic. What type of server does he want to setup?
6. Siya wants to setup a network where every computer should be attached to each other. Which topology will she use?

Q9. Long Question Answers: (Do any 5) (3X5=15)

1. What is the difference between a web page and a website?
2. What is the role of Slice Tool when we are talking about a website?
3. Why Spot Healing Brush Tool is called as texture replacement tool?
4. Write HTML code to add audio in a web page.
5. Explain any two advantages of AI.
6. Explain any two real life usages of NLP.



Bhagwan Mahaveer Public Senior Secondary School

Class : 8th S & N (2024-25)

Subject: Artificial Intelligence

Term-I

M.M 8

Q1. MCQ: (1X7=7)

1. Which of the following computer network spans across city?
 - a) LAN
 - b) MAN
 - c) WAN
 - d) CAN
2. A computer network that can be used only within an organization is called _____.
 - a) Internet
 - b) Intranet
 - c) Both (i) and (ii)
 - d) None of these
3. Which of these tools helps you to insert text in the Photoshop document?
 - a) Paint Bucket Tool
 - b) Type Tool
 - c) Pencil Tool
 - d) Brush Tool
4. Which tool helps in putting textures as the background on Canvas?
 - a) Pattern Stamp Tool
 - b) Stamp Tool
 - c) Sponge Tool
 - d) Blur Tool
5. It is a highlighted text or image which when clicked takes to another webpage.
 - a) Anchor
 - b) Tag
 - c) Hyperlink
 - d) Table
6. What is Artificial Intelligence?
 - a) Playing a game on computer
 - b) Making a machine intelligent
 - c) Programming on machine with your own intelligence
 - d) Putting your intelligence in machine
7. Which of the following have the tendency to get bored while performing repetitive tasks?
 - a) Humans
 - b) AI system
 - c) Both (i) & (ii)
 - d) None

Q2. Fill in the blanks:**(1X7=7)**

1. _____ is a set of rules that governs the communication between computers on a network.
2. _____ is a protocol used to send e-mail messages over the internet.
3. Pixels are the _____ on the computer screen.
4. Extension of Photoshop file is _____.
5. The _____ panel shows the numeric value of the color.
6. The _____ tag is used to link two webpages.
7. _____ domain is also used by Word Processor for spell checking.

Q3. Write True/ False:**(1X7=7)**

1. In Bus topology, all the nodes are connected to a single common path.
2. Gradient background can be created with the help of the Paint Bucket Tool.
3. NLP proves to be quite useful in voice text messaging and virtual assistants.
4. With the help of Hand Tool, we can even rotate the canvas.
5. The default colour of the visited link is blue.
6. FORM tag is used to create the form boundary on the webpage.
7. Pen Tool can create straight and curved lines, remove objects, design shape, etc.

Q4. Write the full form of the following: (Do any 7) (2X7=14)

- | | | | |
|--------|---------|---------|--------|
| 1) WAN | 2) HTTP | 3) HTML | 4) URL |
| 5) USB | 6) ISP | 7) GUI | 8) NLP |

Q5. Write the shortcut keys for the following. (Do any 7)**(1X7=7)**

1. To rename selected file.
2. To lock the computer.
3. To move one word to the right.

4. To undo an action
5. To repeat the last action.
6. To select all content.
7. To print a file.
8. To take a screenshot.

Q6. Very short Questions. (Do any 10) (1X5=5)

1. Name the computer which depends on server for all resources ?
2. Name the network that spans across a city?
3. Which selection tool works like a pencil?
4. In the color Replacement Tool, which option helps in selecting the range of color and replacing it with the foreground color?
5. Which tool is used to make the image hazy?
6. Which technology will be used to track player movements in tennis?

Q7. Short Question Answers: (Do any 7) (2X6=12)

1. What is topology?
2. What is Gateway?
3. What do you mean by a layer?
4. What is the use of Ruler Tool in Photoshop?
5. What is the purpose of Border attribute in tag ?
6. What is Big Data?
7. Describe LAN.

Q8. Application Based Questions (1X6=6)

1. Sumit wants to set up a network for his organisation. He wants to use a topology in which all nodes are connected in a circular path. Which topology should he choose?